

Name: _____ Date: _____
Email: _____ Phone Number: _____

EXPERIENCE & SKILLS EVALUATION QUESTIONNAIRE

The applicant hired will be required to perform a variety of duties such as:

- Operating power tools and hand tools
- understand basic engine mechanics and basic electrical
- Be a problem solver, understand hydraulic and/or electrical schematics and follow detailed instructions.

Select the description response that best describes your level of experience to perform the work described in the job above. (Circle the number)

- 1.) I have no experience in this area.
- 2.) I have related experience that demonstrates my ability to perform the job.
- 3.) I have experience in performing the duties required of the job. I have completed assigned tasks independently and routinely and have carried them out successfully.
- 4.) I am highly skilled in performing the duties required of the job, have worked independently and carried out assigned jobs successfully. I have also trained or supervised others, planned and /or completed various work projects as directed by my supervisors.

Select the number next to the power tools you have experience operating.

1. Power Drill
2. Acetylene Torch
3. Torqued wrench
4. Hydraulic Hose Press
5. Angle Grinder
6. Air Compressor
7. Table Grinder
8. Impact Gun
9. Milling Machine
10. Drill Press
11. Leathe
12. Multimeter
13. Welder (stick) (Mig) (Tig)
14. Plasma Torch
15. Grease Gun

For the following questions: *Rate your ability* **1 = No experience,**

10 = Professional grade

• Do you have a Mechanics background?

1 2 3 4 **5** 6 7 8 9 **10**

• Do you have basic electrical experience (AKA how to use multimeter)

1 2 3 4 **5** 6 7 8 9 **10**

• Do you have Hydraulic experience?

1 2 3 4 **5** 6 7 8 9 **10**

• Do you have shop safety experience?

1 2 3 4 **5** 6 7 8 9 **10**

• Do you have welding or fabrication experience?

1 2 3 4 **5** 6 7 8 9 **10**

• Do you have experience operating a bobcat or heavy machinery?

1 2 3 4 **5** 6 7 8 9 **10**

• Can you read a tape measure?

Yes / No

Please locate and mark:

1. 4-3/4"
2. 6-1/2"
3. 8-3/8"
4. 0.5'
5. 7-5/16"
6. 2"
7. ONE FOOT

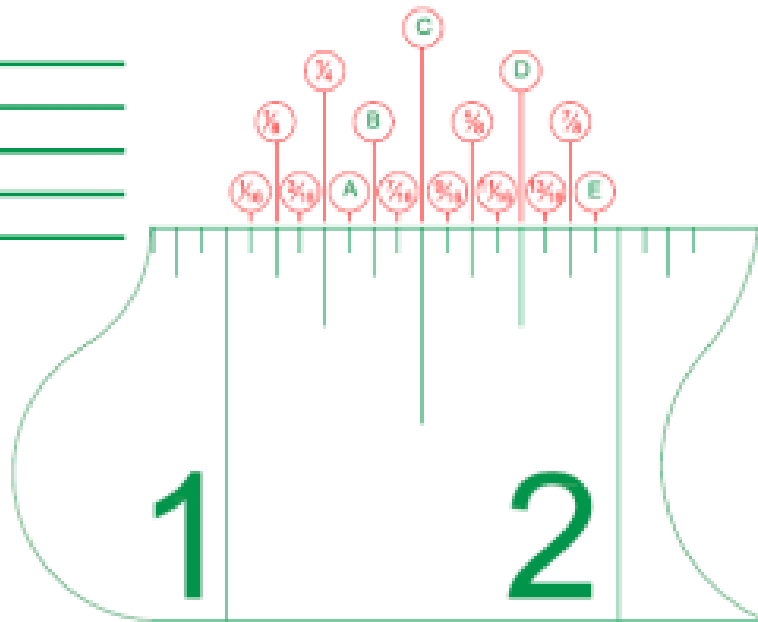
EXAMPLE

1



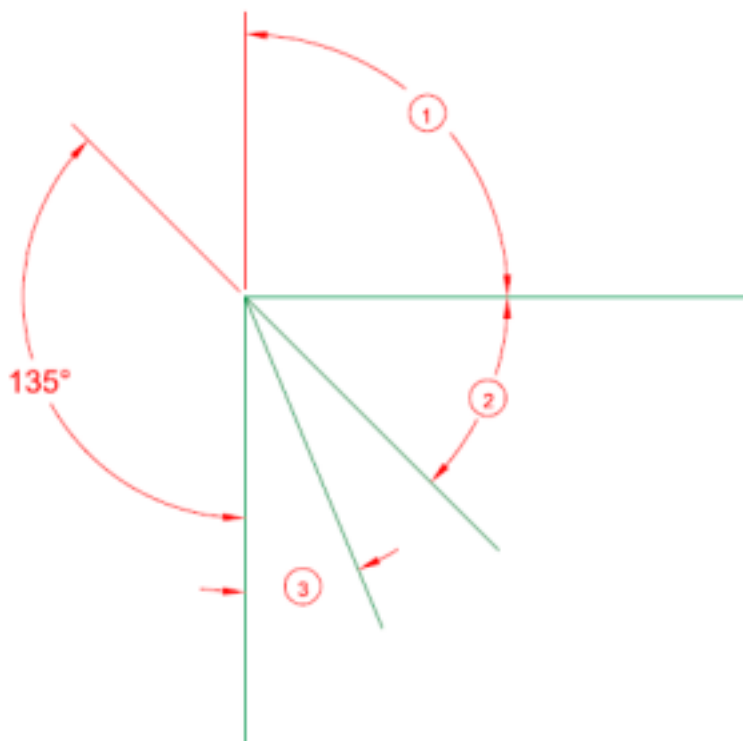
Please write in the measurements that are labeled in the diagram:

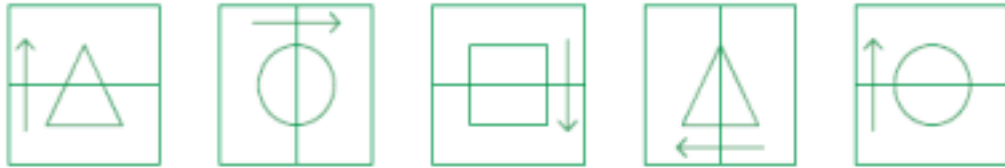
- A. _____
- B. _____
- C. _____
- D. _____
- E. _____



Please write in the angles from the diagram below:

- 1. _____
- 2. _____
- 3. _____





What comes next in the sequence?



A

B

C

D

E



What comes next in the sequence?



A

B


C

D

E



What comes next in the sequence?



A

B

C

D

E